



Diagram 1

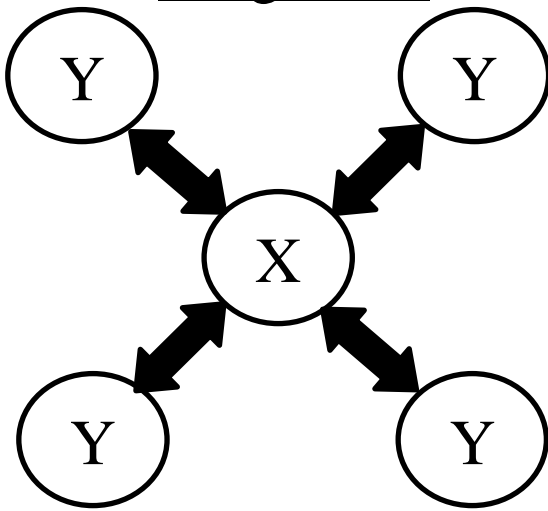


Diagram 2

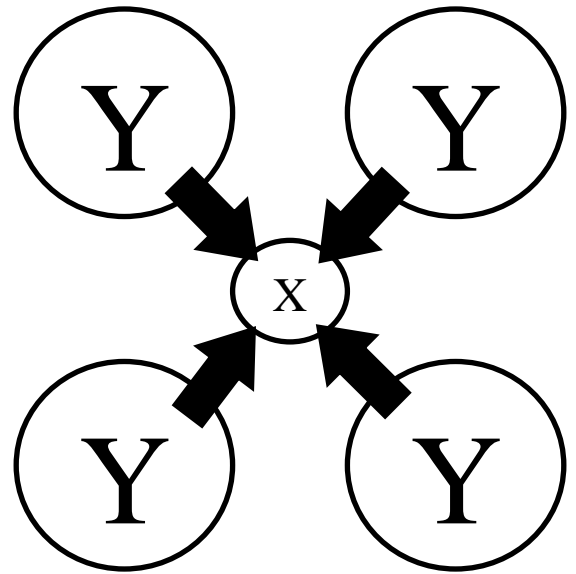
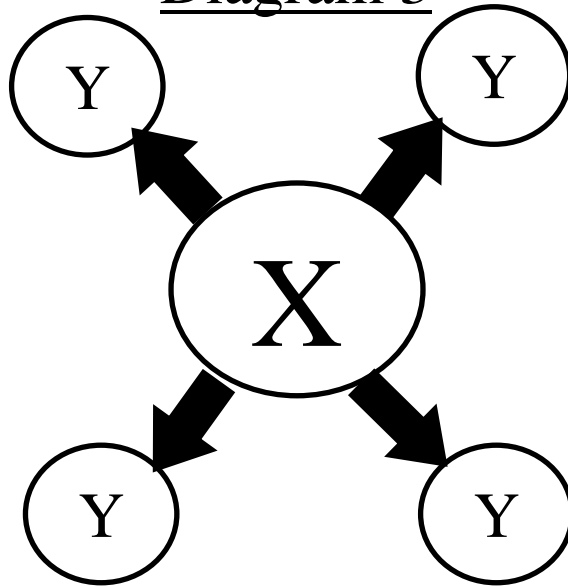


Diagram 3



9. What type of government does diagram 1 represent?

- a. confederation
- b. federal
- c. unitary

10. What type of government does diagram 2 represent?

- a. confederation
- b. federal
- c. unitary

11. What type of government does diagram 3 represent?

- a. confederation
- b. federal
- c. unitary

12. What level of authority do the X's represent?

- a. executive
- b. central
- c. legislative
- d. regional

13. What level of authority do the Y's represent?

- a. executive
- b. central
- c. legislative
- d. regional